


*Handwritten signature*

**ARMY PUBLIC SCHOOL RATNUCHAK**  
**SESSION 2018-19**  
**WORKSHEET**  
**CLASS-I**  
**SUBJECT-ENGLISH**

Q1 Fill in the blanks with is / are/ am.



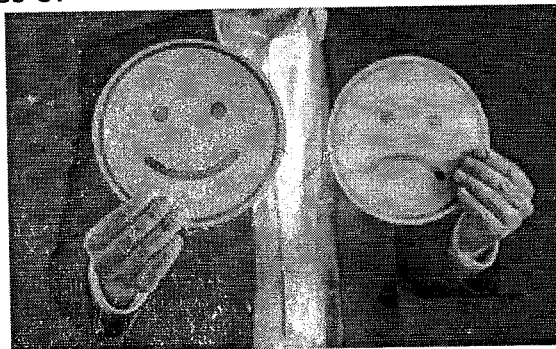
IS



ARE

- i) She \_\_\_\_\_ going to school.
- ii) Boys \_\_\_\_\_ playing in the ground.
- iii) We \_\_\_\_\_ running.
- iv) I \_\_\_\_\_ writing.
- v) You \_\_\_\_\_ a good student.
- vi) He \_\_\_\_\_ reading a book.
- vii) We \_\_\_\_\_ doing our work.
- viii) My father \_\_\_\_\_ driving the car.

Q2 Write opposites of



- i) Come \_\_\_\_\_
- ii) Stand \_\_\_\_\_

iii) Hot \_\_\_\_\_

iv) Up \_\_\_\_\_

v) In \_\_\_\_\_

vi) Give \_\_\_\_\_

vii) Dry \_\_\_\_\_

viii) Big \_\_\_\_\_

Q3 Complete the following sequence.

i) Pan, Can, \_\_\_\_\_, \_\_\_\_\_.


ii) Map, Cap, \_\_\_\_\_, \_\_\_\_\_.

iii) Den, Hen, \_\_\_\_\_, \_\_\_\_\_.

iv) Mat, Cat, \_\_\_\_\_, \_\_\_\_\_.

v) Lip, Hip, \_\_\_\_\_, \_\_\_\_\_.

Q4 Change the gender of:



i) Father \_\_\_\_\_

ii) Boy \_\_\_\_\_

iii) Sir \_\_\_\_\_

iv) Uncle \_\_\_\_\_



v) Grandfather \_\_\_\_\_

vi) Brother \_\_\_\_\_

vii) Bull \_\_\_\_\_

viii) Cock \_\_\_\_\_

Q5 Write the plural of



i) Cup \_\_\_\_\_

ii) Pencil \_\_\_\_\_

iii) Dog \_\_\_\_\_

iv) Girl \_\_\_\_\_

v) Pen \_\_\_\_\_

vi) Boy \_\_\_\_\_

vii) Bat \_\_\_\_\_

viii) Fan \_\_\_\_\_

Q6 Match the column.

i) Dogs is baking a cake.

ii) I are barking.

iii) My mom is rising.

iv) Flowers am fond of sweets.

v) The sun are beautiful.

Q7 Write the names of any five birds in alphabetical order.



- i) \_\_\_\_\_
- ii) \_\_\_\_\_
- iii) \_\_\_\_\_
- iv) \_\_\_\_\_
- v) \_\_\_\_\_

Q8 Complete the words with correct consonants using the given hints and learn the spellings too.

- i) Name of a vegetable ----- O \_ \_ I O \_ \_
- ii) Name of a juicy fruit ----- \_ \_ I \_ \_ E A \_ \_ \_ \_ \_ E
- iii) Name of our national bird ---- \_ \_ E A \_ \_ O \_ \_ \_ \_ .
- iv) Birthday is incomplete without eating it ---- \_ \_ A \_ \_ E.
- v) It is a musical instrument ---- \_ \_ U I \_ \_ A R.

Q9 Choose the correct option and fill in the blanks.

- i) Mr. Jain owns two \_\_\_\_\_. (house / houses).
- ii) There are seven \_\_\_\_\_ in a week. ( days / day).
- iii) There are thirty students in my \_\_\_\_\_. (class / classes)
- iv) My \_\_\_\_\_ is very pretty. (mother / mothers)
- v) An \_\_\_\_\_ is a juicy fruit. (orange / oranges)
- vi) The \_\_\_\_\_ are twinkling in the sky. (star / stars)

Handwritten signature

आर्मी पब्लिक स्कूल रत्नूचक

कार्य पत्रिका

सत्र 2018-19

कक्षा - पहली


प्र०1. चित्र को उसके नाम से मिलाओ ओर उनमें रंग भरिए।

(क)



बादल

(ख)



छाता

(ग)



आम

(घ)



तारा

प्र०2. आ की मात्रा वाले दो शब्द लिखिए।

.....

.....


प्र०3. इ की मात्रा के दो शब्द लिखिए।

.....

प्र०4. स्वर और व्यंजन अलग करो।

प, छ, अ, ऊ, ख, ओ, ए

प्र०5. चित्र देखकर पहला अक्षर लिखिए।



.....छली



.....स

प्र०6. स्वर माला पूरी करो।

अ, ..... , इ, ..... , ऊ, ..... , ए, ..... ,

ऐ, ..... , औ

प्र०7. अक्षरों को जोड़कर शब्द बनाओ।

(क) थ + र + म + स = .....

(ख) अ + ना + र = .....

प्र०8. लाल रंग के फल का नाम लिखिए।

.....

प्र०9. पीले रंग के फल का नाम लिखो।

.....

प्र०10. हरे पत्ते वाली एक सब्जी का नाम लिखो।

.....

प्र०11. अपना नाम हिंदी में लिखो।

उ० .....

प्र०12. 'भ' व्यंजन से किसी जानवर का नाम लिखिए।

उ० .....

प्र०13. अपनी पसंद के एक फल का चित्र बनाकर नाम लिखें।

उ० .....

प्र०14. 'टमाटर' के अक्षर अलग करके लिखिए।

..... + ..... + ..... + र


प्र०15. दो सब्जियों के नाम छाँटकर लिखिए।

गा	ब	पा	श
ज	म	ल	स
र	आ	क	त
म	ट	र	च

(क) .....

(ख) .....

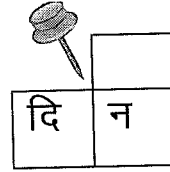
प्र०16. काले बादलों का एक चित्र बनाकर उस पर एक वाक्य लिखिए।



प्र०17. एक वर्ण लिखकर नया शब्द बनाइए।



		कि
हि	र	ण




प्र०18. कौन क्या खाता है मिलान करो।

(क)



(ख)






m

**Army Public School Ratnuchak**  
**Worksheet**  
**Session: 2018-19**  
**Subject: Mathematics**

**Class: 1<sup>st</sup>**

RD 11-23

**Q1. Colour the smallest one red.**




**Q2. Colour the inside of the Chotta Bheem pink and the space outside yellow.**




**Q3. Solve Addition problems on the left and draw line to match your answer with the same number of the picture on the right.**

$$3 + 6$$




$$4 + 3$$




**Q4. Solve Subtraction problems on the left and draw line to match your answer with the same number of the picture on the right.**

$$7 - 2$$




$$10 - 4$$




**Q5. What comes before.**

\_\_\_\_\_




\_\_\_\_\_



**Q6. What comes after.**




\_\_\_\_\_



\_\_\_\_\_


**Q7. What comes in between.**

**18**



**20**

**8**




**10**


**Q8. \_\_\_\_\_ comes between May and July.**

**Q9. \_\_\_\_\_ is the fourth day of the week.**

**Q10. \_\_\_\_\_ comes after December.**


**Q11. Count the Objects, write the number and add them.**


a)   
 $\square + \square = \square$


b)   
 $\square + \square = \square$

**Q12. Subtract.**



**Example**

 
$$\begin{array}{r} 5 \\ - 2 \\ \hline 3 \end{array}$$


a)  
$$\begin{array}{r} 9 \\ - 4 \\ \hline \end{array}$$

b)  
$$\begin{array}{r} 8 \\ - 3 \\ \hline \end{array}$$


**Q13. Count the objects and circle the correct number.**

	7 5 6
	8 4 3



**Q14. Write the given numbers in increasing order.**



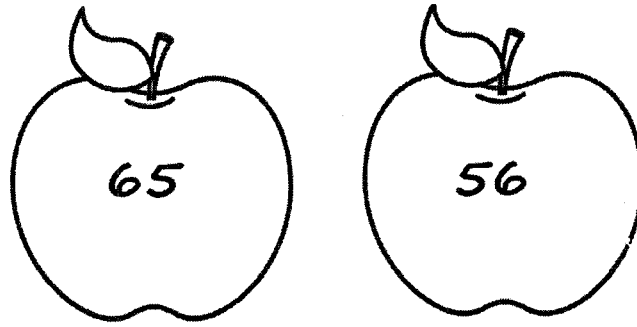
**Q15. Write the given numbers in decreasing order.**





**Q16. Colour (Yellow) the Cat with the greater number.**



**Q17. Colour (Red) the Apple with the smaller number.**



**Q18. Circle the correct symbol.**



**Q19. Jack's hen lays 6 eggs on Monday 2 eggs on Wednesday and 1 egg on Friday. How many eggs did Jack's hen lay?**

**Ans:**

**Q20. You have 7 toffees and you ate 2 of them. How many toffees do you have left?**

**Ans:**

*Handwritten signature*

**ARMY PUBLIC SCHOOL RATNUCHAK**

**SESSION 2018-19**

**WORK SHEET**

**CLASS - 1**

**SUBJECT - E.V.S**

**NAME \_\_\_\_\_**

**CLASS \_\_\_\_\_ SEC \_\_\_\_\_**


**Q1. Choose the correct answer**

- a. I see with my \_\_\_\_\_ ( nose / eyes).
- b. I smell the rose with my \_\_\_\_\_ ( nose /ears ) .
- c. I taste the pizza with my \_\_\_\_\_ (tongue / eyes ) .
- d. A small family is also known as \_\_\_\_\_ ( nuclear / joint ) family .
- e. Father and mother together are known as \_\_\_\_\_ ( grand parents / family )

**Q. 2 Self Introduction**

- a. Hello ! My name is \_\_\_\_\_.
- b. I am \_\_\_\_\_ years old .
- c. I live in \_\_\_\_\_
- d. I study in class \_\_\_\_\_.
- e. I go to \_\_\_\_\_ school.

**Q. 3 Name the parts of body and fill in the boxes and colour it .**



**ARMY PUBLIC SCHOOL RATNUCHAK**

**SESSION 2018-19**

**COMPUTER WORKSHEET**


Name: \_\_\_\_\_ Class: I. Sec.: \_\_\_\_\_

**Fill in the blanks**

Mistakes Electronic Machine TV Brain

1. A computer is a \_\_\_\_\_.
2. A computer never makes \_\_\_\_\_.
3. Laptop is a \_\_\_\_\_ machine.
4. A CPU is the \_\_\_\_\_ of a computer.
5. A monitor looks like a \_\_\_\_\_ screen.

**Match the following**



Monitor



CPU



Mouse



Keyboard



**Write 'T' for true and 'F' for false statement**

1. A computer works very slowly.
2. Machines are man-made things.
3. A television is a machine.
4. CPU looks like a TV.
5. A mouse helps us to draw and play games.
6. A computer is a smart machine.

**Tick the correct one.**

**Machine**

**Manual**

**Electronic**

